

### General Intelligence

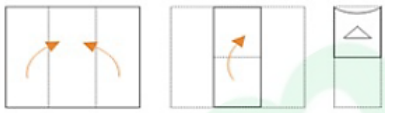
1. Select the option that is related to the third number is the same way as the second number is related to the first number.

54 : 41 :: 32 : \_\_\_\_\_

- A. 29                      B. 13  
C. 17                      D. 11

Ans: B

2. A paper is folded and cut as shown in the following figures. How will it appear when unfolded?



- A. B. C. D.

Ans: B

3. Select the correct mirror image of the given figure when the mirror is placed to the right of the figure.



- A. B. C. D.

Ans: B

4. Which two signs should be interchanged in the following equation to make it correct?

$$24 \div 2 + 13 - 54 \times 2 = 24$$

- A. + and  $\times$                       B. - and  $\times$   
C.  $\times$  and  $\div$                       D. - and  $\div$


Ans: C

5. Arrange the following words in the logical and meaningful order.

1. Promotion
  2. Application
  3. Job appointment
  4. Written test
  5. Merit list
- A. 2, 5, 4, 3, 1                      B. 3, 2, 4, 1, 5  
C. 4, 2, 5, 3, 1                      D. 2, 4, 5, 3, 1

Ans: D

6. How many triangles are present in the following figure?



- A. 14                      B. 13  
C. 10                      D. 12

Ans: B

7. Select the figure that will come next in the following figure series.



- A. B. C. D.

Ans: D

8. Three statements are given, followed by three conclusions numbered I, II and III. Assuming the statements to be true, even if they seem to be at variance with commonly known facts, decide which of the conclusions logically follow(s) from the statements.

**Statement:**

- Some essay are poems.
- Some poems are directors.
- All directors are singers.

**Conclusions:**

- I. Some directors are poems.
  - II. Some singers are essays.
  - III. Some singers are poems.
- A. Only conclusions I and III follow.  
B. Only conclusions II and III follow.  
C. Only conclusions I and II follow.  
D. Only conclusion I follow.

Ans: A

9. Rahul has Rs. 340 in the denominations of Rs. 2 notes, Rs. 5 notes and Rs. 10 notes. The number of notes of

each denomination is equal. What is the total number of notes that Rahul has?

- A. 40
- B. 60
- C. 20
- D. 80

**Ans:** B

**10.** Which number will replace the question mark (?) in the following series?

**5, 9, 18, 43, 92, 213, 382, ?**

- A. 328
- B. 617
- C. 382
- D. 671

**Ans:** D

**11.** Three of the following four letter-clusters are alike in a certain way and one is different. Pick the odd one out.

- A. GSVE
- B. LOPK
- C. CXGT
- D. MNQJ

**Ans:** A

**12.** In a code language, PERMUTATION is written as IBKFRMXMFLG. How will PUBLICSECTOR be written as in that language?

- A. ICUFEVLBVNLK
- B. ICUFEVLBVMLJ
- C. IRUEFVLBVMLK
- D. IRVEFVLBVMLK

**Ans:** C

**13.** Select the combination of letters that when sequentially placed in the gaps of the given letter series will complete the series.

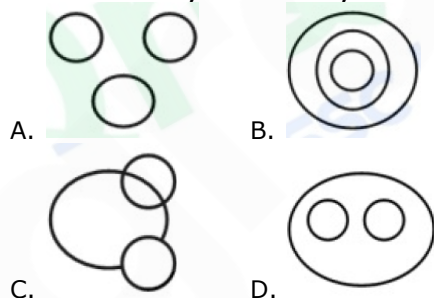
**Ab\_ba\_babd\_acd\_bdba\_b**

- A. cdabc
- B. dcbac
- C. acbcd
- D. dcabc

**Ans:** B

**14.** Select the Venn diagram that best illustrates the relationship between the following classes.

**Raw material, Labourers, Machines**



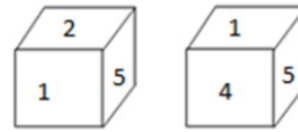
**Ans:** A

**15.** In a family of 5 members, X is the sister of Y. M has two children and he is the son of E, who is the father-in-law of H. H has only one son. Y is not the grand-daughter of E. How is X related to E?

- A. Sister
- B. Daughter
- C. Grand-daughter
- D. Grandson

**Ans:** C

**16.** Two different positions of the same dice are shown. Find the number opposite to the face having 4.



- A. 6
- B. 3
- C. 2
- D. 1

**Ans:** C

**17.** 'Cardiologist' is related to 'Heart' in the same way as 'Chiropractor' is related to \_\_\_\_\_.

- A. Skin
- B. Foot
- C. Chest
- D. Joints

**Ans:** D

**18.** If MASTER is coded as 26138402536 and GOVIND is coded as 142254481288, then how will BACKSPACE be coded as?

- A. 4162238321625
- B. 5172339317125
- C. 4172393337125
- D. 5172933373215

**Ans:** A

**19.** Select the set in which the numbers are related in the same way as are the numbers of the following set.

**(4, 10, 23)**

- A. (7, 23, 49)
- B. (3, 7, 17)
- C. (4, 12, 21)
- D. (2, 6, 15)

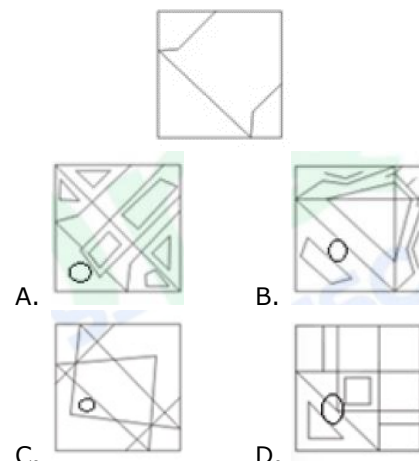
**Ans:** D

**20.** Three of the following four words are alike in a certain way and one is different. Pick the odd word out.

- A. Bag
- B. Suitcase
- C. Purse
- D. Carpet

**Ans:** D

**21.** Select the option in which the given figure is embedded.



**Ans:** C

**22.** Select the option that is related to the third letter-cluster in the same way as

the second letter-cluster is related to the first letter-cluster.

**MARKET : IEONCV :: THERMO : \_\_\_\_**

- A. PLBUKQ                      B. JKCTKQ  
C. PLDSKQ                      D. JLKUKQ

**Ans:** A

**23.** Three of the following four numbers are alike in a certain way and one is different. Pick the number that is different from the rest.

- A. 4147                              B. 8205  
C. 9368                              D. 7298

**Ans:** D

**24.** Select the set in which the numbers are related in the same way as are the numbers of the following set.

**(5, 2, 30)**

- A. (5, 1, 29)                      B. (9, 2, 87)  
C. (4, 3, 28)                      D. (7, 8, 114)

**Ans:** D

**25.** Select the word-pair in which the two words are related in the same way as are the two words in the following word-pair.

**Spoke : Wheel**

- A. Word : Sentence  
B. Printer : Computer  
C. Square : Side  
D. Tree : Branch

**Ans:** A

### General Awareness

**1.** Who among the following was the first Sayyid ruler of Delhi?

- A. Mubarak Shah  
B. Alam Shah  
C. Muhammad Shah  
D. Khizr Shah

**Ans:** D

**2.** Who was the captain of the Indian women's team that won silver at the 2018 Asian Games?

- A. Manpreet Kaur  
B. Ritu Negi  
C. Shalini Pathak  
D. Payel Chowdhury

**Ans:** D

**3.** Which of the following states shares the longest boundary with China?

- A. Sikkim  
B. Arunachal Pradesh  
C. Himachal Pradesh  
D. Uttarakhand

**Ans:** B

**4.** Which of the following political parties was NOT an ally of the BJP-led NDA in 2019 Lok Sabha elections?

- A. Shiromani Akali Dal  
B. Asom Gana Parishad  
C. AIADMK  
D. DMK

**Ans:** D

**5.** Who among the following is the 2019 winner of the \$100,000 Nine Dots Prize?

- A. Annie Zaidi                      B. Chetan Bhagat  
C. Shashi Tharoor                      D. Arundhati Roy

**Ans:** A

**6.** In June 2019, PepsiCo India proposed to invest \$70 million to build a food manufacturing plant in:

- A. Maharashtra                      B. Gujarat  
C. Uttar Pradesh                      D. Madhya Pradesh

**Ans:** C

**7.** Who among the following won a silver medal in the equestrian event at the 2018 Asian Games?

- A. Ashish Malik                      B. Fouaad Mirza  
C. Rakesh Kumar                      D. Jitender Singh

**Ans:** B

**8.** Who is the director of the film 'PM Narendra Modi'?

- A. Tigmanshu Dhulia  
B. Omung Kumar  
C. Rakeysh Omprakash Mehra  
D. Hansal Mehta

**Ans:** B

**9.** On the occasion of 'World No Tobacco Day' on 31 May, which state banned e-cigarettes?

- A. Assam                              B. Uttar Pradesh  
C. Rajasthan                              D. Gujarat

**Ans:** C

**10.** The joint process of vapourisation and condensation is called:

- A. Sublimation                      B. Chromatography  
C. Distillation                      D. Crystallisation

**Ans:** C

**11.** Which of the following metals has an ore named Galena?

- A. Nickel                              B. Copper  
C. Iron                                  D. Lead

**Ans:** D

**12.** The Bhupen Hazarika Setu, also called Dhola-Sadiya Bridge which connects Assam and \_\_\_\_\_.

- A. Sikkim  
B. Meghalaya  
C. West Bengal  
D. Arunachal Pradesh

**Ans:** D

**13.** Panchavati, a key part of the Valmiki Ramayana is located in which state of India?

- A. Tamil Nadu                      B. Uttar Pradesh  
C. Maharashtra                      D. Uttarakhand

**Ans:** C

**14.** In the new Union cabinet of 2019, the portfolio of Micro, Small and Medium Enterprises was allocated to:

- A. Narendra Singh Tomar
- B. Nitin Jairam Gadkari
- C. Ramvilas Paswan
- D. Sadananda Gowda

**Ans:** B

**15.** Rani-ki-Vav (the Queen's Stepwell), which is in the UNESCO World Heritage List, is located in:

- A. Madhya Pradesh
- B. Gujarat
- C. Uttar Pradesh
- D. Rajasthan

**Ans:** B

**16.** During the passage of the Royal Titles Act 1876, the office of the British Prime Minister was occupied by:

- A. William Edward Gladstone
- B. Arthur Balfour
- C. John Russell
- D. Benjamin Disraeli

**Ans:** D

**17.** What is the full form of GSTIN in relation of GST?

- A. Goods and Services Tax Identification Note
- B. Goods and Services Tax Identification Number
- C. Goods and Service Tax Information Number
- D. Goods and Services Taxation Income Number

**Ans:** B

**18.** Paan Singh Tomar, who was a seven-time national champion, was associated with which of the following sports?

- A. Hockey
- B. Swimming
- C. Shotput
- D. Steeplechase

**Ans:** D

**19.** In which year was Google incorporated as a private company?

- A. 2000
- B. 2005
- C. 2002
- D. 1998

**Ans:** D

**20.** In May 2019, the Government of India approved a new scheme which assures minimum monthly pension to all shopkeepers, retail traders and self employed persons after attaining the age of 60 years. How much is the pension amount?

- A. Rs. 5,000
- B. Rs. 10,000
- C. Rs. 3,000
- D. Rs. 7,000

**Ans:** C

**21.** Which of the following terms refers to the running down or payment of a loan in instalments?

- A. Discounted cashflow

- B. Credit creation
- C. Backwardation
- D. Amortisation

**Ans:** D

**22.** Which of the following are the highest-frequency electro magnetic waves?

- A. Gamma Rays
- B. Radio Waves
- C. Ultraviolet Rays
- D. Microwaves

**Ans:** A

**23.** Which of the following states separates Nepal from Bhutan?

- A. Bihar
- B. Sikkim
- C. Odisha
- D. Assam

**Ans:** B

**24.** A region of computer memory where frequently accessed data can be stored for rapid access is called:

- A. Cookie
- B. Plug-in
- C. Token
- D. Cache

**Ans:** D

**25.** Who among the following is the author of 'Kamayani', the epic poem that is considered as one of the greatest literary works in Hindi?

- A. Mohan Rakesh
- B. Jaishankar Prasad
- C. Premchand
- D. Ramdhari Singh Dinkar

**Ans:** B

### Quantitative Aptitude

**1.** If  $\cos^2\theta - \sin^2\theta - 3\cos\theta + 2 = 0$ ,  $0^\circ < \theta < 90^\circ$ , then what is the value of  $4\operatorname{cosec}\theta + \cot\theta$ ?

- A.  $3\sqrt{3}$
- B. 4
- C.  $4\sqrt{3}$
- D. 3

**Ans:** A

**2.** If  $a^2 + 4b^2 + 59c^2 + 18 = 2(2b + 28c - a)$ , then the value of  $(3a + 2b + 7c)$  is:

- A. 0
- B. 2
- C. 1
- D. 3

**Ans:** B

**3.** Two trains of same length are running on parallel tracks in the same direction at 54 km/h and 42 km/h respectively. The faster train passes the other train in 63 seconds. What is the length (in metres) of each train?

- A. 90
- B. 81
- C. 105
- D. 210

**Ans:** C

**4.** Two concentric circles are of radii 15 cm and 9 cm. What is the length of the chord of the larger circle which is tangent to the smaller circle?

- A. 24 cm
- B. 18 cm
- C. 20 cm
- D. 25 cm

**Ans:** A

5. The simple interest on a certain sum for  $3\frac{1}{2}$  years at 10% per annum is Rs. 2,940. What will be the compound interest on the same sum for  $2\frac{1}{2}$  years at the same rate when interest is compounded yearly (nearest to a rupee)?  
 A. Rs. 2,272      B. Rs. 2,227  
 C. Rs. 2,327      D. Rs. 2,372

Ans: A

6.  $\frac{(\sec\theta + \tan\theta)(1 - \sin\theta)}{\operatorname{cosec}(1 + \cos\theta)(\operatorname{cosec}\theta - \cot\theta)}$  is equal to:  
 A.  $\sin\theta$       B.  $\sec\theta$   
 C.  $\cos\theta$       D.  $\operatorname{cosec}\theta$

Ans: C

7. After allowing a discount of 10% on the marked price of an article, it is sold for Rs. 360. Had the discount not been given, the profit would have been 25%. What is the cost price of the article?  
 A. Rs. 350      B. Rs. 360  
 C. Rs. 320      D. Rs. 325

Ans: C

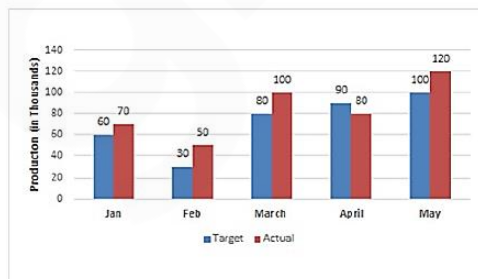
8. The ratio of the incomes of A and B is 2 : 3 and that of their expenditure is 1 : 2. If 905 of B's expenditure is equal to the income of A, then what is the ratio of the savings of A and B?  
 A. 1 : 1      B. 9 : 8  
 C. 8 : 7      D. 3 : 2

Ans: C

9. A person sold an article at a loss of 8%. Had he sold it at a gain of 10.5%, he would have received Rs. 37 more. What is the cost price of the article?  
 A. Rs. 200      B. Rs. 250  
 C. Rs. 240      D. Rs. 210

Ans: A

10. The given Bar Graph presents the Target and Actual production of AC Machines (numbers in thousands) of a factory over five months.



The ratio of the combined target production of AC Machines in January and April to that of the combined actual

production of AC Machines in March and April was:

- A. 4 : 5      B. 3 : 2  
 C. 5 : 6      D. 2 : 3

Ans: C

11. There are 90 students in a class, out of which 70% are from village A and others are from village B. The average score of students from village B in a test is 20% more than that from village A. If the average score of all the students is 53, then what is the average score of the students from village B?  
 A. 54      B. 60  
 C. 64      D. 50

Ans: B

12. A is 20% more than B, B is 25% more than C, C is 60% less than D and D is 20% more than E. Based on the above information, which of the following is true?  
 A. D is 60% less than B.  
 B. E is 28% more than A.  
 C. A is 40% less than D.  
 D. C is 24% less than A.

Ans: C

13. In  $\triangle ABC$ , D and E are the points on sides AB and AC, respectively, such that  $DE \parallel BC$ . If  $DE : BC$  is 3 : 5, then (Area of  $\triangle ADE$ ) : (Area of quadrilateral DECB) is:  
 A. 9 : 16      B. 3 : 4  
 C. 9 : 25      D. 5 : 8

Ans: A

14. In  $\triangle ABC$ ,  $AB = 7$  cm,  $BC = 24$  cm and  $AC = 25$  cm. If G is the centroid of the triangle, then what is the length (in cm) of BG?  
 A. 10      B.  $8\frac{1}{3}$   
 C.  $8\frac{2}{3}$       D. 9

Ans: B

15. If 30 persons take 10 days to complete a certain work working 8 hours a day, then 40 persons should work how many hours a day so that the work is completed in 6 days?  
 A. 6      B. 10  
 C. 8      D. 12

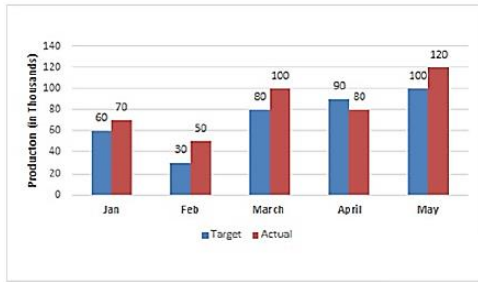
Ans: B

16. The volume of a right circular cone is  $924 \text{ cm}^3$ . If its height is 18 cm, then the area of its base (in  $\text{cm}^2$ ) is:  
 A. 154      B. 132  
 C. 176      D. 198

Ans: A

17. The given Bar Graph presents the Target and Actual production of AC Ma-

chines (numbers in thousands) of a factory over five months.



The total target production of AC Machines in February, April and May was what percentage less than the total actual production of AC Machines over all the five months (correct to one decimal place)?

- A. 46.2%                      B. 46.8%  
C. 47.1%                      D. 47.6%

Ans: D

18. If the eight-digit number  $342x18y6$  is divisible by 72, then what is the value of  $\sqrt{9x+y}$ , for the largest value of  $y$ ?

- A.  $2\sqrt{7}$                       B.  $4\sqrt{7}$   
C. 8                              D. 6

Ans: D

19. If  $\cot \theta = \frac{1}{\sqrt{3}}$ , then the value of

$$\frac{2 - \sin^2 \theta}{1 - \cos^2 \theta} + (\operatorname{cosec}^2 \theta + \sec \theta)$$
 is:

- A. 4                              B. 6  
C. 7                              D. 5

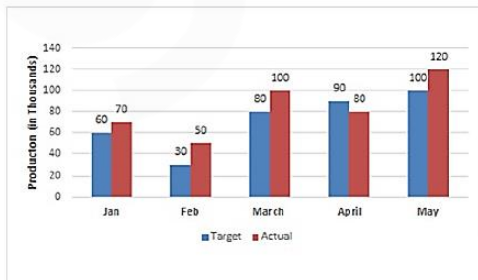
Ans: D

20. Two circles of radii 15 cm and 12 cm intersect each other, and the length of their common chord is 18 cm. What is the distance (in cm) between their centres?

- A.  $18 + \sqrt{7}$                       B.  $15 + \sqrt{7}$   
C.  $12 + 2\sqrt{7}$                       D.  $12 + 3\sqrt{7}$

Ans: D

21. The given Bar Graph presents the Target and Actual production of AC Machines (numbers in thousands) of a factory over five months.



The actual production of AC Machines in April was what percentage more than the average target production of AC Machines over five months?

- A.  $10\frac{1}{9}\%$                       B.  $11\frac{1}{9}\%$   
C. 9%                              D. 10%

Ans: B

22. The value of  $3 \div \{5 - 5 \div (6 - 7) \times 8 + 9\}$  over  $4 + 4 \times 4 \div 4$  of 4

is:

- A.  $\frac{1}{45}$                               B.  $\frac{1}{18}$   
C.  $\frac{1}{90}$                               D.  $\frac{1}{3}$

Ans: C

23. If  $a + b + c = 5$ ,  $a^2 + b^2 + c^2 = 27$ , and  $a^3 + b^3 + c^3 = 125$ , then the value of  $4abc$  is:

- A. -20                              B. -15  
C. 15                                D. 20

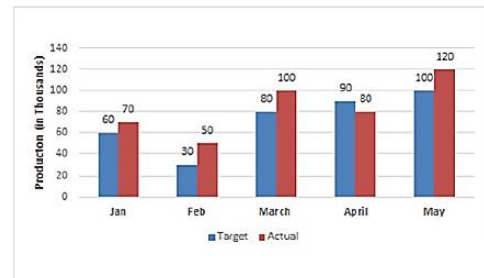
Ans: A

24. If  $3\sqrt{3}x^3 - 2\sqrt{2}y^3 = (\sqrt{3}x - \sqrt{2}y)(Ax^2 - Bxy + Cy^2)$ , then the value of  $(A^2 - B^2 + C^2)$  is

- A. 10                              B. 17  
C. 7                                D. 1

Ans: C

25. The given Bar Graph presents the Target and Actual production of AC Machines (numbers in thousands) of a factory over five months.



In which month the actual production of AC Machines was 25% more than the target production?

- A. February                      B. March  
C. January                      D. May

Ans: B

### English Language

#### Comprehension:

In the following passage some words have been deleted. Fill in the blanks with the help of the alternatives given. Select the most appropriate option for each blank.

Big Ben is the UK's most iconic symbol. Since 2017, the Elizabeth Tower and the bell inside have been **(1)** \_\_\_\_\_ renovation. The structure is 160 years old and **(2)** \_\_\_\_\_ regular maintenance. **(3)** \_\_\_\_\_ many years, people had been painting the hands and numbers **(4)** \_\_\_\_\_ the clock black, but last Thursday, the workers **(5)** \_\_\_\_\_ the clock's original colour, Prussian Blue!

**SubQuestion No: 1**

1. Select the most appropriate option for blank No. 1.
- A. undermining      B. understanding  
C. undergoing      D. undertaking

**Ans:** C

**Comprehension:**

In the following passage some words have been deleted. Fill in the blanks with the help of the alternatives given. Select the most appropriate option for each blank.

Big Ben is the UK's most iconic symbol. Since 2017, the Elizabeth Tower and the bell inside have been **(1)** \_\_\_\_\_ renovation. The structure is 160 years old and **(2)** \_\_\_\_\_ regular maintenance. **(3)** \_\_\_\_\_ many years, people had been painting the hands and numbers **(4)** \_\_\_\_\_ the clock black, but last Thursday, the workers **(5)** \_\_\_\_\_ the clock's original colour, Prussian Blue!

**SubQuestion No: 2**

2. Select the most appropriate option for blank No. 2.
- A. need      B. was needing  
C. is needed      D. had needed

**Ans:** D

**Comprehension:**

In the following passage some words have been deleted. Fill in the blanks with the help of the alternatives given. Select the most appropriate option for each blank.

Big Ben is the UK's most iconic symbol. Since 2017, the Elizabeth Tower and the bell inside have been **(1)** \_\_\_\_\_ renovation. The structure is 160 years old and **(2)** \_\_\_\_\_ regular maintenance. **(3)** \_\_\_\_\_ many years, people had been painting the hands and numbers **(4)** \_\_\_\_\_ the clock black, but last Thursday, the workers **(5)** \_\_\_\_\_ the clock's original colour, Prussian Blue!

**SubQuestion No: 3**

3. Select the most appropriate option for blank No. 3.
- A. About      B. For

- C. Before      D. in

**Ans:** B

**Comprehension:**

In the following passage some words have been deleted. Fill in the blanks with the help of the alternatives given. Select the most appropriate option for each blank.

Big Ben is the UK's most iconic symbol. Since 2017, the Elizabeth Tower and the bell inside have been **(1)** \_\_\_\_\_ renovation. The structure is 160 years old and **(2)** \_\_\_\_\_ regular maintenance. **(3)** \_\_\_\_\_ many years, people had been painting the hands and numbers **(4)** \_\_\_\_\_ the clock black, but last Thursday, the workers **(5)** \_\_\_\_\_ the clock's original colour, Prussian Blue!

**SubQuestion No: 4**

4. Select the most appropriate option for blank No. 4.
- A. to      B. of  
C. at      D. for

**Ans:** B

**Comprehension:**

In the following passage some words have been deleted. Fill in the blanks with the help of the alternatives given. Select the most appropriate option for each blank.

Big Ben is the UK's most iconic symbol. Since 2017, the Elizabeth Tower and the bell inside have been **(1)** \_\_\_\_\_ renovation. The structure is 160 years old and **(2)** \_\_\_\_\_ regular maintenance. **(3)** \_\_\_\_\_ many years, people had been painting the hands and numbers **(4)** \_\_\_\_\_ the clock black, but last Thursday, the workers **(5)** \_\_\_\_\_ the clock's original colour, Prussian Blue!

**SubQuestion No: 5**

5. Select the most appropriate option for blank No. 5.
- A. imparted      B. invented  
C. discovered      D. concealed

**Ans:** C

6. Select the most appropriate option to substitute the underlined segment in the given sentence. If there is no need to substitute it, select No improvement.

Oh, what a lovely necklace! You **need to buy** such an expensive gift.

- A. hadn't needed to buy  
B. needn't have bought  
C. No improvement  
D. didn't need to buying

**Ans:** B

7. Select the most appropriate antonym of the given word.

**EXOTIC**

- A. alien                      B. ordinary  
C. colourful                 D. curious

**Ans:** B

8. In the sentence of identify the segment which contains the grammatical error.

I visited my friend to whom I had made an appointment.

- A. I visited my friend  
B. I had made  
C. to whom  
D. an appointment

**Ans:** C

9. Select the most appropriate option to substitute the underlined segment in the given sentence. If there is no need to substitute it, select No improvement.

I hope never to have another so experience as I had in Puri during Cyclone Fani.

- A. No improvement  
B. such experience as  
C. as experience as  
D. same experience as

**Ans:** B

10. Select the most appropriate word to fill in the blank.

People's will and determination can help them \_\_\_\_\_ most of the challenges of life.

- A. overvalue                 B. overdo  
C. overview                 D. overcome

**Ans:** D

11. Select the word which means the same as the group of words given.

One who does not tire easily  
A. infallible                 B. indefatigable  
C. inevitable                D. indelible

**Ans:** B

12. In the sentence identify the segment which contains the grammatical error.

The Public Works Department has propose to construct an elevated corridor which will run parallel to the National highway.

- A. to the National highway  
B. The Public Works Department has propose  
C. which will run parallel  
D. to construct an elevated corridor

**Ans:** B

13. Select the word which means the same as the group of words given.

A group of singers in a church

- A. choir                      B. band  
C. host                        D. troop

**Ans:** A

14. Select the wrongly spelt word.

- A. berry                      B. barren  
C. berrel                     D. barrier

**Ans:** C

15. Given below are four jumbled sentences. Out of the given options pick the one that gives their correct order.

- A.** Most of them are in a jail because of their circumstances.  
**B.** Not all prisoners are hardcore criminals.  
**C.** So, they deserve a chance to rehabilitate themselves.  
**D.** Therefore, learning a trade would help them reintegrate with society.

- A. BDCA                      B. ABCD  
C. DCBA                     D. BACD

**Ans:** D

16. Select the most appropriate meaning of the given idiom.

to air dirty linen in public

- A. to discuss private affairs in public  
B. to hang out clothes in the open  
C. to continue to complain  
D. to stand up and fight

**Ans:** A

17. Select the most appropriate meaning of the given idiom

throw in the towel

- A. face the situation  
B. think of a solution  
C. admit defeat  
D. drop something

**Ans:** C

18. Given below are four jumbled sentences. Out of the given options pick the one that gives their correct order.

- A.** He often asked questions which were strange and witty.  
**B.** Emperor Akbar was in the habit of putting riddles and puzzles to his courtiers.  
**C.** Once he asked a strange question that a confused everyone.  
**D.** It took much wisdom to answer these questions.

- A. BADC                      B. CABD  
C. ABCD                     D. BACD

**Ans:** A

19. Select the most appropriate word to fill in the blank.



In spite of being born in an \_\_\_\_\_ family, he chose to fight all odds and emerged as a notable statesman.

- A. impeccable      B. immaculate  
C. intelligent      D. impoverished

**Ans:** D

- 20.** Select the most appropriate synonym of the given word.

**HIND**

- A. near                      B. rear  
C. first                      D. front

**Ans:** B

- 21.** Select the most appropriate synonym of the given word.

**INNUENDO**

- A. implication      B. evidence  
C. verification      D. proof

**Ans:** A

- 22.** Select the correct indirect form of the given sentence.

Mrs. Gupta said to me, "Why are these boys standing in the sun?"

- A. Mrs. Gupta told me why those boys are standing in the sun.  
B. Mrs. Gupta asked me why those boys were standing in the sun.  
C. Mrs. Gupta said to me that why are these boys standing in the sun.  
D. Mrs. Gupta asked me why were these boys standing in the sun.

**Ans:** B

- 23.** Select the wrongly spelt word.

- A. assurance      B. assurable  
C. assure              D. assuredly

**Ans:** A

- 24.** Select the most appropriate antonym of the given word.

**SUCCINCT**

- A. pithy                      B. terse  
C. lengthy                      D. curt

**Ans:** C

- 25.** Select the correct passive form of the given sentence.

The gardener has mowed the lawn.

- A. The lawn was mowed by the gardener.  
B. The lawn has been mowed by the gardener.  
C. The lawn is mowed by the gardener.  
D. The gardener has been mowed by the lawn.

**Ans:** B