

SSC GD Paper Held On 12 February 2019

Section : General Section

Q.1 The statements below are followed by two conclusions labeled I and II. Assuming that the information in the statements is true, even if it appears to be at variance with generally established facts, decide which conclusion(s) logically and definitely follow(s) from the information given in the statements.

Statements:

- I. All cars are tigers.
- II. Some children are tigers.

Conclusions:

- I. Some cars are children.
- II. Some children are cars.

- Ans**
- 1. Only conclusion I follows
 - 2. Neither I nor II follows
 - 3. Either I or II follows
 - 4. Only conclusion II follows

Question ID : 9895808880
Chosen Option : 2

Q.2 Select the correct option that will fill in the blank and complete the series.

RQS, SOQ, TMO, _____

- Ans**
- 1. XCV
 - 2. SMN
 - 3. UKM
 - 4. ULP

Question ID : 9895808868
Chosen Option : --

Q.3 Select the correct option that will fill in the blank and complete the series.

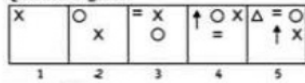
35, 42, 33, 40, 31, 38, _____

- Ans**
- 1. 31
 - 2. 33
 - 3. 29
 - 4. 35

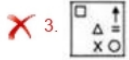
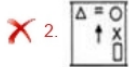
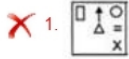
Question ID : 9895808881
Chosen Option : 3

Q.4 Choose the option which completes the given figure series.

Question Figures:

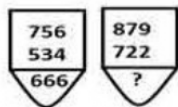


Ans



Question ID : 9895808887
Chosen Option : 4

Q.5 Find the missing number from the below options.



- Ans
- ✗ 1. 482
 - ✗ 2. 571
 - ✗ 3. 562
 - ✓ 4. 471

Question ID : 9895808885
Chosen Option : 1

Q.6 Select the option that is related to the third term in the same way as the second term is related to the first term.

RA : IZ :: SQ : ?

- Ans
- ✗ 1. OT
 - ✓ 2. HJ
 - ✗ 3. RS
 - ✗ 4. XC

Question ID : 9895808873
Chosen Option : 1

Q.7 Four options have been given out of which three are alike in some manner, while one is different. Choose the odd one.

- Ans
- ✗ 1. 10 - 33
 - ✓ 2. 8 - 19
 - ✗ 3. 9 - 30
 - ✗ 4. 7 - 24

Question ID : 9895808884
Chosen Option : 4

Q.8

Seven children A, B, C, D, E, F and G are standing in a row. G is to the right of D and to the left of B. A is on the right of C. A and D have one child between them. F is second to the right of G. D and F have two children between them.

Who is on the extreme right?

- Ans
- 1. G
 - 2. F
 - 3. E
 - 4. B

Question ID : 9895808877
Chosen Option : 4

Q.9 Which of the following answer figure will complete the given figure?

Question Figure:



- Ans
- 1.
 - 2.
 - 3.
 - 4.

Question ID : 9895808888
Chosen Option : 4

Q.1 A piece of paper is folded and cut as shown below in the question figure. From the given answer figures, indicate how it will appear when opened?

Question figures:



- Ans
- 1.
 - 2.
 - 3.
 - 4.

Question ID : 9895808891
Chosen Option : 3

Q.1 In a certain code, SAMOA is coded as QZMPC, then how is GAMER coded in the same way?

1

- Ans
- 1. EZMFU
 - 2. EZMTF
 - 3. EZTMF
 - 4. EZMFT

Question ID : 9895808874
Chosen Option : 4

Q.1 Choose the option that most closely resembles the mirror image of the given figure when mirror is placed at left side.

2

Question figure:

- Ans
- 1.
 - 2.
 - 3.
 - 4.

Question ID : 9895808890
Chosen Option : 2

Q.1 The statements below are followed by two conclusions labeled I and II. Assuming that the information in the statements is true, even if it appears to be at variance with generally established facts, decide which conclusion(s) logically and definitely follow(s) from the information given in the statements.

3

Statements:

- I. All Stems are flowers.
- II. Some flowers are trees.
- III. Some trees are leaves.

Conclusions:

- I. Some stems are trees.
- II. Some flowers are leaves

- Ans
- 1. Neither I nor II follows
 - 2. Only II follows
 - 3. Only I follows
 - 4. Both I and II follow

Question ID : 9895808879
Chosen Option : 4

Q.1 Four words have been given out of which three are alike in some manner, while one is different. Choose the odd one.

4

- Ans
- 1. Kilometer
 - 2. Millimeter
 - 3. Ammeter
 - 4. Decimeter

Question ID : 9895808870

Chosen Option : 3

Q.1
5 If 'U' means '-', 'W' means '÷', 'T' means '+', and 'V' means '×', then:

33 T 77 U 11 T 1 = ?

- Ans
- 1. 100
 - 2. 101
 - 3. 110
 - 4. 200

Question ID : 9895808886

Chosen Option : 1

Q.1
6 Select the option that is related to the third term in the same way as the second term is related to the first term.

Wood : Carpenter :: Iron : _____

- Ans
- 1. Goldsmith
 - 2. Tailor
 - 3. Farmer
 - 4. Blacksmith

Question ID : 9895808871

Chosen Option : 1

Q.1
7 Four letter clusters have been given out of which three are alike in some manner, while one is different. Choose the odd one.

- Ans
- 1. LJKK
 - 2. KLOI
 - 3. STUO
 - 4. BCIE

Question ID : 9895808869

Chosen Option : 1

Q.1
8 In a car exhibition, seven cars of seven different companies viz. Car01, Car02, Car03, Car04, Car05, Car06 and Car07 were displayed in a row, facing north such that:

- I. Car01 was to the immediate right of Car07.
- II. Car07 was fourth to the right of Car03.
- III. Car04 was between Car02 and Car06.
- IV. Car03, which was third to the left of Car02, was at one of the ends.

Which of the following was the correct position of the Car05?

- Ans
- 1. Between Car06 and Car07
 - 2. Immediate right of Car01
 - 3. Between Car02 and Car07
 - 4. Immediate left of Car06

Question ID : 9895808876

Chosen Option : 3

Q.1
9 Select the option that is related to the Third term in the same way as the second term is related to the first term.

57 : 6 :: 97 : ?

- Ans
- 1. 5
 - 2. 7

3. 9
 4. 8

Question ID : 9895808883
 Chosen Option : 4

Q.2
 0 In a row of men, Manish is 30th from the right and Kavir is 20th from the left. When they interchange their position, Manish becomes 35th from the right. What is the total number of men in the row?

- Ans 1. 44
 2. 54
 3. 34
 4. 45

Question ID : 9895808878
 Chosen Option : 4

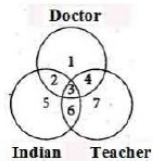
Q.2
 1 Select the correct option that will fill in the blank and complete the series.

12, 26, 54, 110, 222, _____

- Ans 1. 444
 2. 446
 3. 423
 4. 452

Question ID : 9895808882
 Chosen Option : 2

Q.2
 2 In the following diagram, there are three circles. Study the diagram carefully and answer the given questions.



Find out those teachers who are doctors but not Indians.

- Ans 1. 2
 2. 5
 3. 4
 4. 7

Question ID : 9895808892
 Chosen Option : 3

Q.2
 3 Select the related word pair from the given alternatives.

Novel : Novelist : _____ : _____

- Ans 1. Television : Journalist
 2. Music : Dancing
 3. Book : Author
 4. Publications : Columnist


Question ID : 9895808872
 Chosen Option : 3

Q.2
4 Choose the option figure in which the problem figure is hidden / embedded.

Question figure:



Ans



Question ID : 9895808889
Chosen Option : 3

Q.2
5 If SMILEY is written as 41.5 and CRY as 23, how will LAPPY be written?

Ans 1. 42

2. 30

3. 32

4. 35

Question ID : 9895808875
Chosen Option : 4

Q.2
6 What will happen when an egg is placed in a vinegar solution for 20-24 hours?

Ans 1. The egg shell will dissolve.

2. The egg shell will break.

3. The egg shell will shrink in size.

4. The egg shell will increase in size.

Question ID : 9895808935
Chosen Option : 1

Q.2
7 Who is the Chairman of the Rajya Sabha?

Ans 1. Leader of the Opposition

2. President

3. Prime Minister

4. Vice President

Question ID : 9895808929
Chosen Option : 2

Q.2
8 _____ is a dance performed in West Bengal for the Durga Puja at the time of Dussehra.

- Ans
- 1. Kikkli
 - 2. Tera Tali
 - 3. Dhunachi
 - 4. Kolattam

Question ID : 9895808919
Chosen Option : 1

Q.2
9 Which of the following is a correct food chain?

- Ans
- 1. Grass-deer-snake-lion
 - 2. Grass-mouse-snake-hawk
 - 3. Grass-rabbit-snake-lion
 - 4. Grass-rabbit-snake-hawk-lion

Question ID : 9895808936
Chosen Option : 1

Q.3
0 Which of the following is NOT a Kharif crop?

- Ans
- 1. Barley
 - 2. Jowar
 - 3. Maize
 - 4. Bajra

Question ID : 9895808937
Chosen Option : 1

Q.3
1 Which among the following countries is the largest producer of tea?

- Ans
- 1. China
 - 2. Turkey
 - 3. India
 - 4. Brazil

Question ID : 9895808938
Chosen Option : 4

Q.3
2 Who wrote the famous epic poem Padmavat?

- Ans
- 1. Amir Khusrow
 - 2. Khwaja Moinuddin Chisti
 - 3. Abul Fazal
 - 4. Malik Muhammad Jayasi

Question ID : 9895808925
Chosen Option : 2

Q.3
3 Which of the following is the deepest landlocked port in India?

- Ans
- 1. Kandla
 - 2. Vishakhapatnam

3. Mormugao
 4. Thoothukudi

Question ID : 9895808939
Chosen Option : 2

Q.3
4 Mayur Nritya or Peacock dance is a folk dance from the Braj region of _____.

- Ans 1. Andhra Pradesh
 2. Uttar Pradesh
 3. Odisha
 4. Bihar

Question ID : 9895808918
Chosen Option : 1

Q.3
5 The Constitution of India contained how many articles at the time of commencement?

- Ans 1. 393
 2. 394
 3. 395
 4. 392

Question ID : 9895808930
Chosen Option : 3

Q.3
6 The world's first underground railway system was started in _____.

- Ans 1. London
 2. Moscow
 3. Washington
 4. Paris

Question ID : 9895808942
Chosen Option : 3

Q.3
7 Spinach contains unusually high percentage of _____ acid as a natural product.

- Ans 1. Tartaric Acid
 2. Lactic Acid
 3. Citric Acid
 4. Oxalic Acid

Question ID : 9895808932
Chosen Option : 2

Q.3
8 India's longest elevated road is situated in _____.

- Ans 1. Ghaziabad
 2. Agra
 3. Lucknow
 4. Varanasi

Question ID : 9895808924
Chosen Option : 1

Q.3
9 Which of the following countries has a better Gross National Income (GNI) than India?

- Ans
- 1. Sri Lanka
 - 2. Nepal
 - 3. Bangladesh
 - 4. Pakistan

Question ID : 9895808928
Chosen Option : 4

Q.4
0 NSSO stands for:

- Ans
- 1. National Social Service Organisation
 - 2. National Statistical Survey Organisation
 - 3. National Sale Service Organisation
 - 4. National Sample Survey Organisation

Question ID : 9895808926
Chosen Option : 4

Q.4
1 What is the main purpose of water harvesting?

- Ans
- 1. hold water on the surface of the earth
 - 2. recharge ground water
 - 3. make dams
 - 4. reduce soil erosion

Question ID : 9895808933
Chosen Option : 3

Q.4
2 The Buland Darwaza at Fatehpur Sikri was constructed by _____.

- Ans
- 1. Shahjahan
 - 2. Humayun
 - 3. Akbar
 - 4. Jahangir

Question ID : 9895808940
Chosen Option : 1

Q.4
3 22nd December is celebrated as _____.

- Ans
- 1. National Science Day
 - 2. National Mathematics Day
 - 3. National Technology Day
 - 4. National Literacy Day

Question ID : 9895808923

Chosen Option : 1

Q.4
4 Bleeding in dengue is due to a decrease in number of _____.

- Ans
- 1. red blood cells
 - 2. white blood cells
 - 3. plasma
 - 4. platelets

Question ID : 9895808934
Chosen Option : 4

Q.4
5 The Second Round Table Conference was held in _____.

- Ans
- 1. December 1932
 - 2. December 1929
 - 3. December 1930
 - 4. December 1931

Question ID : 9895808941
Chosen Option : 2

Q.4
6 Which fort in the Jaipur area of Rajasthan is known for its artistic Hindu style elements and is also a World Heritage site?

- Ans
- 1. Mehrangarh Fort
 - 2. Chittorgarh Fort
 - 3. Amber Fort
 - 4. Gwalior Fort

Question ID : 9895808920
Chosen Option : 1

Q.4
7 The Twelfth Five-Year Plan of India was from _____.

- Ans
- 1. 2011 to 2016
 - 2. 2010 to 2015
 - 3. 2012 to 2017
 - 4. 2013 to 2018

Question ID : 9895808927
Chosen Option : 1

Q.4
8 Article 21A deals with the:

- Ans
- 1. Right to Constitutional Remedies
 - 2. Right to Free and compulsory education to all children of the age of six to fourteen years
 - 3. Right against Exploitation
 - 4. Right to Freedom and Religion

Question ID : 9895808931
Chosen Option : 4

Q.4
9 Who holds the current World Chess Championship title 2018?

- Ans
- 1. Viswanathan Anand
 - 2. Magnus Carlsen
 - 3. Sergey Karjakin
 - 4. Fabino Caruana

Question ID : 9895808921
Chosen Option : 2

Q.5
0 As of November 2018, Mary Kom is the first woman boxer to win _____ world championship gold medals.

- Ans
- 1. 7
 - 2. 9
 - 3. 6
 - 4. 8

Question ID : 9895808922
Chosen Option : 1

Q.5
1 If A can complete a work in 30 days and B can complete the same work in 20 days, then in how many days will A and B together complete the same work?

- Ans
- 1. 12 days
 - 2. 15 days
 - 3. 20 days
 - 4. 18 days

Question ID : 9895809058
Chosen Option : 1

Q.5
2 The ratio of the number of boys and girls in a school of 468 students is 5 : 4. How many new girls should join the school so that the ratio of boys and girls becomes 1 : 1?

- Ans
- 1. 52
 - 2. 48
 - 3. 50
 - 4. 56

Question ID : 9895809053
Chosen Option : 1

Q.5
3 A trader sells his goods at 10% discount on the marked price. How much should he keep the marked price of item to get a profit of 10%, when cost price is ₹ 900?

- Ans
- 1. ₹ 1175
 - 2. ₹ 1100
 - 3. ₹ 1250
 - 4. ₹ 1275

Question ID : 9895809048
Chosen Option : 1

Q.5
4 Area of a rhombus is 175 cm^2 . Length of one diagonal is 25 cm. What is the length of other diagonal?

- Ans
- 1. 12 cm
 - 2. 14 cm
 - 3. 10 cm
 - 4. 15 cm

Question ID : 9895809063
Chosen Option : 1

Q.5
5 The difference between the compound interest and simple interest on a certain sum at 10% per annum for 2 years is ₹ 42 when the interest is compounded yearly. What is the sum?

- Ans
- 1. ₹ 8400
 - 2. ₹ 2100
 - 3. ₹ 4200
 - 4. ₹ 5200

Question ID : 9895809057
Chosen Option : 1

Q.5
6 A person gets a profit of 20% by selling an object on certain price. If he sells it on double of the price, then what will be percentage profit on old selling price?

- Ans
- 1. $66\frac{2}{3}\%$
 - 2. 120%
 - 3. 100%
 - 4. 40%

Question ID : 9895809051
Chosen Option : 1

Q.5
7 There is a loss of 10% after selling an item for ₹ 72. What should be its selling price to get a profit of 5%?

- Ans
- 1. ₹ 85
 - 2. ₹ 80
 - 3. ₹ 87
 - 4. ₹ 84

Question ID : 9895809052
Chosen Option : 1

Q.5
8 The average of marks scored by 40 students was 160. Later on it was discovered that one mark 165 was wrongly copied as 125. The correct average is:

- Ans
- 1. 162
 - 2. 160
 - 3. 161
 - 4. 163

Question ID : 9895809047
Chosen Option : 1

Q.5
9 A train passes a station platform in 36 seconds and a man standing on the platform in 20 seconds. If the speed of the train is 72 km/ph. what is the length of the train?

- Ans
- 1. 120 metres
 - 2. 320 metres
 - 3. 360 metres
 - 4. 240 metres

Question ID : 9895809061
Chosen Option : 1

Q.6
0 The range of 11, 9, 18, 35, 42, 26, 4, 19, and 31 is:

- Ans
- 1. 38
 - 2. 26
 - 3. 42
 - 4. 4

Question ID : 9895809049
Chosen Option : 4

Q.6
1 If a boy walks from his house to school at 8 km/hr then he is late by 30 minutes and if he walks at 12 km/hr then he reached on time. The distance of his school from his house is:

- Ans
- 1. 10 km
 - 2. 18 km
 - 3. 15 km
 - 4. 12 km

Question ID : 9895809060
Chosen Option : 1

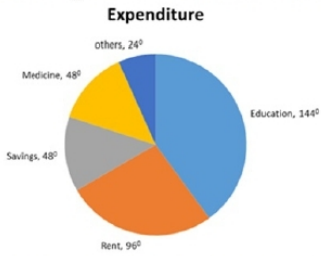
Q.6
2 A rectangular field has length of 1200 m and breadth of 500 m. A road has to be made along its diagonal at the rate of ₹ 25 per m. What is the cost of making road?

- Ans
- 1. ₹ 25600
 - 2. ₹ 32500
 - 3. ₹ 35000
 - 4. ₹ 28400

Question ID : 9895809062
Chosen Option : 1

Q.6
3

DIRECTIONS: These questions are based on the given pie chart. The pie chart shows the monthly expenditure of Mr. Sachin on various items. Study the chart and answer the given questions.



Expenditure on medicine is approximately how much percent of total expenditure?

- Ans
- 1. 13.33%
 - 2. 12.5%
 - 3. 14%
 - 4. 36%

Question ID : 9895809067
Chosen Option : 1

Q.6
4 What is the least perfect cube which is divisible by 5, 10 and 15?

- Ans
- 1. 24000
 - 2. 21000
 - 3. 64000
 - 4. 27000

Question ID : 9895809043
Chosen Option : 1

Q.6
5 Simplify:

$$999 + 111 \times 0.5 = ?$$

- Ans
- 1. 500
 - 2. 555
 - 3. 1110.5
 - 4. 1054.5

Question ID : 9895809044
Chosen Option : 4

Q.6
6 The ratio of the boys and girls at a school's annual function was 1 : 2 but when 10 boys and 10 girls left, the ratio became 2 : 5. How many students were at the annual function originally?

- Ans
- 1. 102
 - 2. 84
 - 3. 96
 - 4. 90

Question ID : 9895809054
Chosen Option : 1

Q.6
7 Simplify:

$$4 \times 12 + 699 = ?$$

- Ans
- 1. 630
 - 2. 670
 - 3. 655
 - 4. 747

Question ID : 9895809045
Chosen Option : 4

Q.6
8 60 boys working 7 hours a day can do a work in 18 days. In how many days will 28 boys working 9 hours a day do the same work?

- Ans
- 1. 25 days
 - 2. 30 days
 - 3. 20 days
 - 4. 40 days

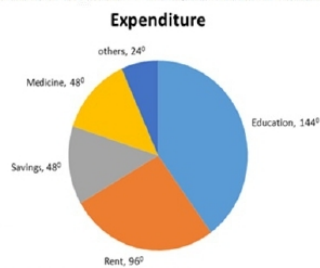
Question ID : 9895809059
Chosen Option : 1

Q.6
9 40% of a number 147.2. 25% of the same number is:

- Ans
- 1. 58
 - 2. 62
 - 3. 61
 - 4. 92

Question ID : 9895809050
Chosen Option : 1

Q.7
0 DIRECTIONS: These questions are based on the given pie chart. The pie chart shows the monthly expenditure of Mr. Sachin on various items. Study the chart and answer the given questions.



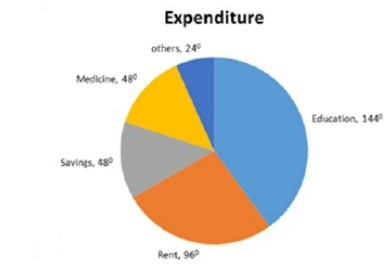
The ratio of saving and education is:

- Ans
- 1. 3 : 4
 - 2. 1 : 3
 - 3. 1 : 1
 - 4. 2 : 3

Question ID : 9895809066

Chosen Option : 1

Q.7 DIRECTIONS: These questions are based on the given pie chart. The pie chart shows the monthly expenditure of Mr. Sachin on various items. Study the chart and answer the given questions.



If the monthly income of Mr. Sachin is ₹ 48000 then his expenditure on rent in two years are:

- Ans**
- 1. ₹ 308200
 - 2. ₹ 148000
 - 3. ₹ 307200
 - 4. ₹ 153600

Question ID : 9895809065
Chosen Option : 1

Q.7
2 The average of even number from 10 to 20 is:

- Ans**
- 1. 12
 - 2. 14
 - 3. 16
 - 4. 15

Question ID : 9895809046
Chosen Option : 1

Q.7
3 The volume of a frustum of a cone with radii 8 cm and 10 cm and height is 21 cm is: (Take: $\pi = \frac{22}{7}$)

- Ans**
- 1. 5368 cm³
 - 2. 4328 cm³
 - 3. 6112 cm³
 - 4. 4816 cm³

Question ID : 9895809064
Chosen Option : 1

Q.7
4 A sum of money is divided among A, B, C and D in the ratio of 3 : 4 : 9 : 10 respectively. If the share of D is ₹ 3612 more than the share of A, then what is the total amount of money received by A and D together ?

- Ans**
- 1. ₹ 6568
 - 2. ₹ 6708
 - 3. ₹ 6228
 - 4. ₹ 6028

Question ID : 9895809055
Chosen Option : 1

Q.7
5 What sum of money will produce ₹ 120 interest in 10 years at 5 % per annum simple interest(in ₹)?

- Ans
- 1. ₹ 350
 - 2. ₹ 280
 - 3. ₹ 360
 - 4. ₹ 240

Question ID : 9895809056
Chosen Option : 1

Section : English Language

Q.1 Select the word which means the same as the group of words given.

An animal that lives by killing and eating other animals

- Ans
- 1. Predator
 - 2. Amphibian
 - 3. Biped
 - 4. Quadruped

Question ID : 9895809192
Chosen Option : 1

Q.2 Select the word which means the same as the group of words given.

Not connected with religious or spiritual matters.

- Ans
- 1. Atheist
 - 2. Communal
 - 3. Secular
 - 4. Veteran

Question ID : 9895809193
Chosen Option : 1

Q.3 Identify the segment in the sentence which contains the grammatical error from the given options.

Some people lose their eyesights because of a disease or injury.

- Ans
- 1. their eyesights
 - 2. Some people
 - 3. disease or injury
 - 4. because of

Question ID : 9895809173
Chosen Option : 1

Q.4 Identify the segment in the sentence which contains the grammatical error from the given options.

The sense of sight is one of the most important senses gift to us.

- Ans
- 1. The sense
 - 2. is one of the
 - 3. gift to us
 - 4. most important

Question ID : 9895809172
Chosen Option : 1

Q.5 Select the most appropriate word to fill in the blank.

A major earthquake _____ in India on 8 October 2005 in Uri.

- Ans
- 1. has been occurring
 - 2. occurred
 - 3. occurs
 - 4. is occurring

Question ID : 9895809178
Chosen Option : 2

Q.6 Select the synonym of the given word.

PRECISE

- Ans
- 1. Erroneous
 - 2. Ambiguous
 - 3. Inaccurate
 - 4. Accurate

Question ID : 9895809187
Chosen Option : 4

Comprehension:

In the following passage some words have been deleted. Fill in the blanks with the help of the alternatives given. Select the most appropriate option for each number.

Life of the people of the Amazon basin is slowly (1) _____. In the older days the (2) _____ of the forest could be reached only by (3) _____ the river. In 1970 the Trans Amazon highway (4) _____ all parts of the rainforest (5) _____.

SubQuestion No : 7

Q.7 Select the most appropriate option that will fill in the blank number 1

- Ans
- 1. simplifying

- 2. steadying
- 3. changing
- 4. modifying

Question ID : 9895809181
Chosen Option : 3

Comprehension:

In the following passage some words have been deleted. Fill in the blanks with the help of the alternatives given. Select the most appropriate option for each number.

Life of the people of the Amazon basin is slowly (1) _____. In the older days the (2) _____ of the forest could be reached only by (3) _____ the river. In 1970 the Trans Amazon highway (4) _____ all parts of the rainforest (5) _____.

SubQuestion No : 8

Q.8 Select the most appropriate option that will fill in the blank
number 2

- Ans
- 1. heart
 - 2. core
 - 3. thick
 - 4. deep

Question ID : 9895809182
Chosen Option : 2

Comprehension:

In the following passage some words have been deleted. Fill in the blanks with the help of the alternatives given. Select the most appropriate option for each number.

Life of the people of the Amazon basin is slowly (1) _____. In the older days the (2) _____ of the forest could be reached only by (3) _____ the river. In 1970 the Trans Amazon highway (4) _____ all parts of the rainforest (5) _____.

SubQuestion No : 9

Q.9 Select the most appropriate option that will fill in the blank
number 3

- Ans
- 1. boating
 - 2. navigating
 - 3. journeying
 - 4. swimming

Question ID : 9895809183
Chosen Option : 4

Comprehension:

In the following passage some words have been deleted. Fill in the blanks with the help of the alternatives given. Select the most appropriate option for each number.

Life of the people of the Amazon basin is slowly (1) _____. In the older days the (2) _____ of the forest could be reached only by (3) _____ the river. In 1970 the Trans Amazon highway (4) _____ all parts of the rainforest (5) _____.

SubQuestion No : 10

Q.1
0 Select the most appropriate option that will fill in the blank number 4

- Ans
- 1. is making
 - 2. was making
 - 3. made
 - 4. make

Question ID : 9895809184
Chosen Option : 2

Comprehension:

In the following passage some words have been deleted. Fill in the blanks with the help of the alternatives given. Select the most appropriate option for each number.

Life of the people of the Amazon basin is slowly (1) _____. In the older days the (2) _____ of the forest could be reached only by (3) _____ the river. In 1970 the Trans Amazon highway (4) _____ all parts of the rainforest (5) _____.

SubQuestion No : 11

Q.1
1 Select the most appropriate option that will fill in the blank number 5

- Ans
- 1. operative
 - 2. restricted
 - 3. accessible
 - 4. possible

Question ID : 9895809185
Chosen Option : 1

Q.1
2 Select the most appropriate word to fill in the blank.

The great advantage of early rising is the good _____ it gives us to our day.

- Ans
- 1. start
 - 2. humour
 - 3. sense

4. kick

Question ID : 9895809197
Chosen Option : 1

Q.1
3 Select the antonym of the given word.

REVEAL

- Ans 1. Disclose
 2. Hide
 3. Show
 4. Praise

Question ID : 9895809189
Chosen Option : 2

Q.1
4 Select the most appropriate option to substitute the underlined segment in the given sentence. If there is no need to substitute it, select No substitution required.

When a plastic comb is rubbed with dry hair, they acquired a static charge.

- Ans 1. it acquires a
 2. they acquire an
 3. it acquired
 4. No substitution required

Question ID : 9895809176
Chosen Option : 1

Q.1
5 Select the most appropriate word to fill in the blank.

Tin cans, used for storing food, are made _____ electroplating tin onto iron.

- Ans 1. with
 2. by
 3. to
 4. of

Question ID : 9895809179
Chosen Option : 2

Q.1
6 Select the synonym of the given word.

VAGUE

- Ans 1. Definite
 2. Incomplete
 3. Precise
 4. Unclear

Question ID : 9895809186
Chosen Option : 3

Q.1
7 Select the most appropriate option to substitute the underlined segment in the given sentence. If there is no need to substitute it, select No substitution required.

Carrying an umbrella is not at all a good idea during thunderstorms.

- Ans
- 1. No substitution required
 - 2. Carrying a umbrella
 - 3. To carry the umbrella
 - 4. Carry umbrella

Question ID : 9895809177
Chosen Option : 1

Q.1
8 Select the most appropriate option to substitute the underlined segment in the given sentence. If there is no need to substitute it, select No substitution required.

Scientific discoveries is often result of hard work by many people.

- Ans
- 1. is result
 - 2. are often a result
 - 3. No substitution required
 - 4. are resulted

Question ID : 9895809175
Chosen Option : 1

Q.1
9 Select the meaning of the given idiom.

A man of spirit is

- Ans
- 1. A spiritual person
 - 2. A unique person
 - 3. A very courageous man
 - 4. A very talented man

Question ID : 9895809191
Chosen Option : 4

Q.2
0 Select the wrongly spelt word.

- Ans
- 1. Recommend
 - 2. Representative
 - 3. Reception
 - 4. Ridicullous

Question ID : 9895809195
Chosen Option : 1

Q.2
1 Select the wrongly spelt word.

- Ans
- 1. Suspicious
 - 2. Schedule
 - 3. Sustain

4. Secretary

Question ID : 9895809194
Chosen Option : 1

Q.2
2 Select the antonym of the given word.

TREACHEROUS

- Ans 1. Deceitful
 2. Faithful
 3. Disloyal
 4. Unfaithful

Question ID : 9895809188
Chosen Option : 1

Q.2
3 Select the most appropriate word to fill in the blank.

The new textile policy lays great emphasis on stabilizing cotton prices to _____ the interest of cotton growers.

- Ans 1. protect
 2. improve
 3. raise
 4. diversify

Question ID : 9895809196
Chosen Option : 1

Q.2
4 Select the meaning of the given idiom.

Fool's paradise

- Ans 1. imaginary idea
 2. foolish idea
 3. deceptive happiness
 4. unexpected gain

Question ID : 9895809190
Chosen Option : 4

Q.2
5 Identify the segment in the sentence which contains the grammatical error from the given options.

Many Indian languages can be reading using the Braille system.

- Ans 1. using
 2. can be reading
 3. Many Indian
 4. the Braille

Question ID : 9895809174
Chosen Option : --

Section : Hindi Language

Q.1 'उचित' का विलोम शब्द है -

- Ans 1. गलत
 2. सूचित
 3. अनुचित
 4. अच्छा

Question ID : 9895807142
Chosen Option : --

Q.2 सही वर्तनी वाले शब्द का चयन करें।

- Ans 1. हस्ताक्षर
 2. हस्ताक्षार
 3. हस्तक्षर
 4. हास्तक्षर

Question ID : 9895807150
Chosen Option : --

Q.3 रिक्त स्थान को भरने के लिए उपयुक्त शब्द का चयन करें।

वह _____ चालाक है।

- Ans 1. मंद
 2. ठोस
 3. बहुत
 4. दृढ़

Question ID : 9895807132
Chosen Option : --

Q.4 रिक्त स्थान को भरने के लिए उपयुक्त शब्द का चयन करें।

तालाब _____ पानी भरा है।

- Ans 1. को
 2. के
 3. में
 4. पर

Question ID : 9895807133
Chosen Option : --

Q.5 'पहाड़' का पर्यायवाची शब्द है-

- Ans 1. भूधर
 2. भास्कर

✗ 3. जलधर

✗ 4. सरित

Question ID : 9895807143

Chosen Option : --

Comprehension:

निम्नलिखित गद्यांश के रिक्त स्थानों की पूर्ति गद्यांश के नीचे दिए गए प्रश्नों के अनुसार कीजिए-

जनता को राजनीतिक विषयों की शिक्षा तभी _____ (1) रूप से प्राप्त हो सकती है जबकि उसे विभिन्न प्रकार की विचारधाराओं को भली-भाँति समझने और उनमें _____ (2) करने का अवसर मिले। राज्य का कर्तव्य है कि वह जनता को ऐसी मौलिक शिक्षा प्रदान करे जिससे उसमें _____ (3) की क्षमता आ सके। इसमें _____ (4) शिक्षा का सबसे महत्वपूर्ण स्थान है। अगर हम साहस के साथ _____ (5) होकर अपने कर्तव्य का पालन करेंगे तो निःसन्देह हमारा भविष्य उज्ज्वल है।

SubQuestion No : 6

Q.6 गद्यांश में संकेतित रिक्त स्थान (1) के लिए उपयुक्त शब्द होगा।

Ans

✗ 1. अनुचित

✗ 2. समुचित

✗ 3. सीमित

✓ 4. विस्तृत

Question ID : 9895807136

Chosen Option : --

Comprehension:

निम्नलिखित गद्यांश के रिक्त स्थानों की पूर्ति गद्यांश के नीचे दिए गए प्रश्नों के अनुसार कीजिए-

जनता को राजनीतिक विषयों की शिक्षा तभी _____ (1) रूप से प्राप्त हो सकती है जबकि उसे विभिन्न प्रकार की विचारधाराओं को भली-भाँति समझने और उनमें _____ (2) करने का अवसर मिले। राज्य का कर्तव्य है कि वह जनता को ऐसी मौलिक शिक्षा प्रदान करे जिससे उसमें _____ (3) की क्षमता आ सके। इसमें _____ (4) शिक्षा का सबसे महत्वपूर्ण स्थान है। अगर हम साहस के साथ _____ (5) होकर अपने कर्तव्य का पालन करेंगे तो निःसन्देह हमारा भविष्य उज्ज्वल है।

SubQuestion No : 7

Q.7

गद्यांश में संकेतित रिक्त स्थान (2) के लिए उपयुक्त शब्द होगा।

- Ans
- 1. गर्जना
 - 2. गुंजार
 - 3. प्रलाप
 - 4. निर्णय

Question ID : 9895807137
Chosen Option : --

Comprehension:

निम्नलिखित गद्यांश के रिक्त स्थानों की पूर्ति गद्यांश के नीचे दिए गए प्रश्नों के अनुसार कीजिए-

जनता को राजनीतिक विषयों की शिक्षा तभी _____ (1) रूप से प्राप्त हो सकती है जबकि उसे विभिन्न प्रकार की विचारधाराओं को भली-भाँति समझने और उनमें _____ (2) करने का अवसर मिले। राज्य का कर्तव्य है कि वह जनता को ऐसी मौलिक शिक्षा प्रदान करे जिससे उसमें _____ (3) की क्षमता आ सके। इसमें _____ (4) शिक्षा का सबसे महत्वपूर्ण स्थान है। अगर हम साहस के साथ _____ (5) होकर अपने कर्तव्य का पालन करेंगे तो निःसन्देह हमारा भविष्य उज्ज्वल है।

SubQuestion No : 8

Q.8 गद्यांश में संकेतित रिक्त स्थान (3) के लिए उपयुक्त शब्द होगा।

- Ans
- 1. आत्मनिर्माण
 - 2. पतन
 - 3. दुःसाहस
 - 4. विस्मरण

Question ID : 9895807138
Chosen Option : --

Comprehension:

निम्नलिखित गद्यांश के रिक्त स्थानों की पूर्ति गद्यांश के नीचे दिए गए प्रश्नों के अनुसार कीजिए-

जनता को राजनीतिक विषयों की शिक्षा तभी _____ (1) रूप से प्राप्त हो सकती है जबकि उसे विभिन्न प्रकार की विचारधाराओं को भली-भाँति समझने और उनमें _____ (2) करने का अवसर मिले। राज्य का कर्तव्य है कि वह जनता को ऐसी मौलिक शिक्षा प्रदान करे जिससे उसमें _____ (3) की क्षमता आ सके। इसमें _____ (4) शिक्षा का सबसे महत्वपूर्ण स्थान है। अगर हम साहस के साथ _____ (5) होकर अपने कर्तव्य का पालन करेंगे तो निःसन्देह हमारा भविष्य उज्ज्वल है।

SubQuestion No : 9

Q.9 गद्यांश में संकेतित रिक्त स्थान (4) के लिए उपयुक्त शब्द होगा।

- Ans
- 1. नारी
 - 2. धार्मिक
 - 3. पारंपरिक
 - 4. नागरिक

Question ID : 9895807139

Chosen Option : --

Comprehension:

निम्नलिखित गद्यांश के रिक्त स्थानों की पूर्ति गद्यांश के नीचे दिए गए प्रश्नों के अनुसार कीजिए-

जनता को राजनीतिक विषयों की शिक्षा तभी _____ (1) रूप से प्राप्त हो सकती है जबकि उसे विभिन्न प्रकार की विचारधाराओं को भली-भाँति समझने और उनमें _____ (2) करने का अवसर मिले। राज्य का कर्तव्य है कि वह जनता को ऐसी मौलिक शिक्षा प्रदान करे जिससे उसमें _____ (3) की क्षमता आ सके। इसमें _____ (4) शिक्षा का सबसे महत्वपूर्ण स्थान है। अगर हम साहस के साथ _____ (5) होकर अपने कर्तव्य का पालन करेंगे तो निःसन्देह हमारा भविष्य उज्ज्वल है।

SubQuestion No : 10

Q.10 गद्यांश में संकेतित रिक्त स्थान (5) के लिए उपयुक्त शब्द होगा।

- Ans
- 1. संचित
 - 2. अचेत
 - 3. शक्तिशाली
 - 4. सचेत

Question ID : 9895807140

Chosen Option : --

Q.1
1 'मुँह की खाना' मुहावरे का अर्थ है -

- Ans
- 1. बुरी तरह हारना
 - 2. नष्ट करना
 - 3. उदास होना
 - 4. पराजित करना

Question ID : 9895807146

Chosen Option : --

Q.1
2 'निर्गुण' का विलोम शब्द चयन करें।

- Ans
- 1. सगुण
 - 2. निराकार
 - 3. दुर्गुण
 - 4. निपुण

Question ID : 9895807141

Chosen Option : --

Q.1
3 दिए गए वाक्य का वह भाग ज्ञात करें जिसमें कोई त्रुटि है।

सिपाहियों ने अपराधी को कुत्तों का तरह घसीटा।

- Ans
- 1. अपराधी को
 - 2. सिपाहियों ने
 - 3. घसीटा।
 - 4. कुत्तों का तरह

Question ID : 9895807125

Chosen Option : --

Q.1
4 "जिसका कोई शत्रु न हो" के लिए एक शब्द है-

- Ans
- 1. अल्पशत्रु
 - 2. अज्ञातशत्रु
 - 3. अजातशत्रु
 - 4. बहुशत्रु

Question ID : 9895807147

Chosen Option : --

Q.1
5 सही वर्तनी वाले शब्द का चयन करें।

- Ans
- 1. अशिवाद
 - 2. आर्शिवाद
 - 3. आशीर्वाद
 - 4. अर्शिवाद

Question ID : 9895807149
Chosen Option : --

Q.1
6 दिए गए वाक्य का वह भाग ज्ञात करें जिसमें कोई त्रुटि है।

पिछले डेढ़ दशक के दौरान बैंकिंग जगत में तेजी परिवर्तन हुए हैं।

- Ans
- 1. बैंकिंग जगत में
 - 2. के दौरान
 - 3. तेजी परिवर्तन हुए हैं।
 - 4. पिछले डेढ़ दशक

Question ID : 9895807126
Chosen Option : --

Q.1
7 दिए गए वाक्य में रेखांकित खंड को प्रतिस्थापित करने के लिए उपयुक्त विकल्प का चयन करें।
गर्मियों में सूर्य तपता है।

- Ans
- 1. पद्माकर
 - 2. रत्नाकर
 - 3. सुधाकर
 - 4. दिवाकर

Question ID : 9895807129
Chosen Option : --

Q.1
8 रिक्त स्थान को भरने के लिए उपयुक्त शब्द का चयन करें।

दुर्जन दूसरों के दुख का _____ नहीं समझ सकता।

- Ans
- 1. करुणा
 - 2. मर्म
 - 3. कर्म
 - 4. उद्देश्य

Question ID : 9895807131
Chosen Option : --

Q.1
9 दिए गए वाक्य का वह भाग ज्ञात करें जिसमें कोई त्रुटि है।

मैंने श्री रामलाल जी के सहयोग के लिए उनका अत्यंत आभारी हूँ।

- Ans
- 1. उनका अत्यंत

2. आभारी हूँ
 3. मैंने श्री रामलाल जी के
 4. सहयोग के लिए

Question ID : 9895807127
Chosen Option : --

Q.2
0 'जो स्मरण रखने योग्य हो' के लिए एक शब्द है-

- Ans
1. स्मरण
 2. स्मरणीय
 3. याददाश्त
 4. स्मृति

Question ID : 9895807148
Chosen Option : --

Q.2
1 'लाल-पीला होना' मुहावरे का अर्थ है -

- Ans
1. बहुत गुस्सा करना
 2. विरोध करना
 3. झूठ बोलना
 4. प्रसन्न होना

Question ID : 9895807145
Chosen Option : --

Q.2
2 दिए गए वाक्य में रेखांकित खंड को प्रतिस्थापित करने के लिए उपयुक्त विकल्प का चयन करें।

उसके दाँत मोती की तरह चमकते हैं ।

- Ans
1. हीरे
 2. मूँगे
 3. माणिक
 4. मुक्ता

Question ID : 9895807130
Chosen Option : --

Q.2
3 रिक्त स्थान को भरने के लिए उपयुक्त शब्द का चयन करें।

जिस वाक्य में एक उद्देश्य _____ समीपिका क्रिया होती है उसे सरल वाक्य कहा जाता है।

- Ans
1. इसलिए
 2. क्योंकि
 3. और
 4. यद्यपि

Question ID : 9895807134

Chosen Option : --

Q.2
4 'आम' का पर्यायवाची शब्द है-

- Ans 1. रसाल
 2. फल
 3. पिक
 4. अम्बर

Question ID : 9895807144
Chosen Option : --

Q.2
5 दिए गए वाक्य में रेखांकित शब्द को प्रतिस्थापित करने के लिए उपयुक्त विकल्प का चयन करें।

वह अपने कार्य में समर्थ है।

- Ans 1. अक्षम
 2. सक्षम
 3. चालाक
 4. परायण

Question ID : 9895807128
Chosen Option : --